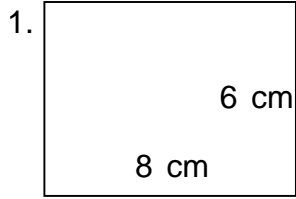
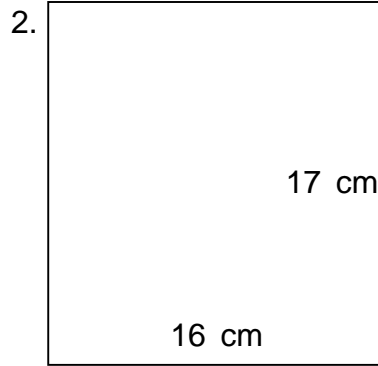


Name: \_\_\_\_\_

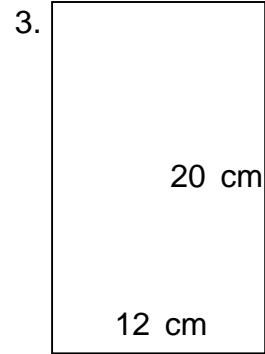
Find the perimeter and area.



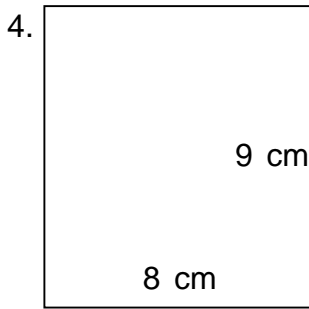
\_\_\_\_\_



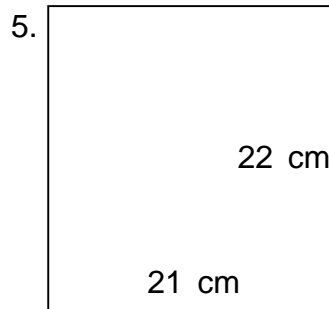
\_\_\_\_\_



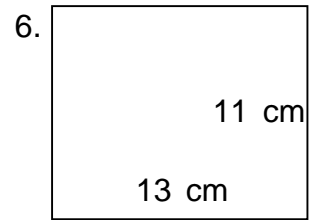
\_\_\_\_\_



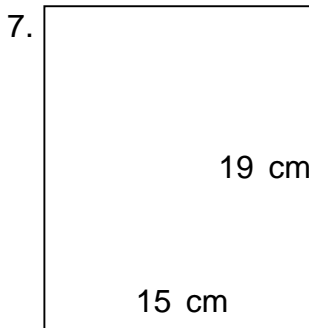
\_\_\_\_\_



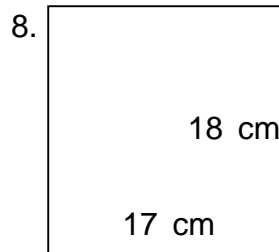
\_\_\_\_\_



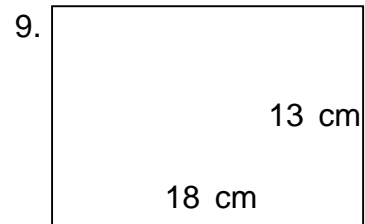
\_\_\_\_\_



\_\_\_\_\_



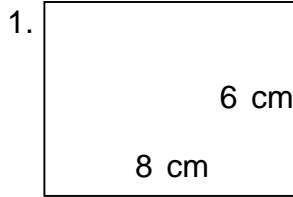
\_\_\_\_\_



\_\_\_\_\_

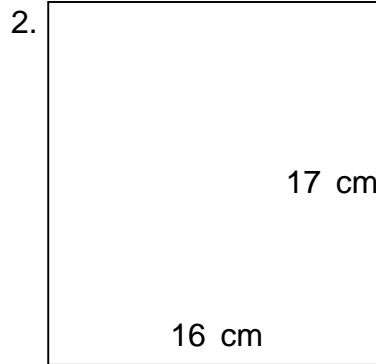
Name: \_\_\_\_\_

Find the perimeter and area.



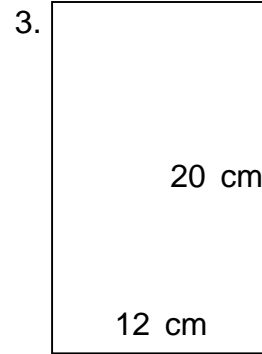
$P = 28 \text{ cm}$   $A = 48 \text{ cm}^2$

---



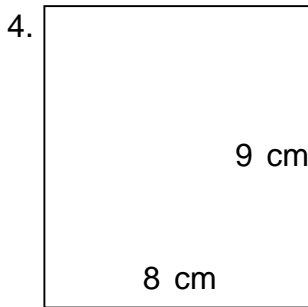
$P = 66 \text{ cm}$   $A = 272 \text{ cm}^2$

---



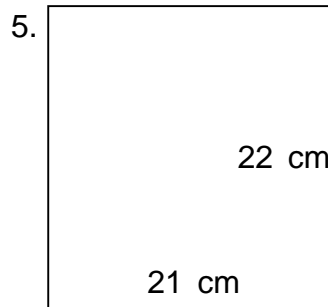
$P = 64 \text{ cm}$   $A = 240 \text{ cm}^2$

---



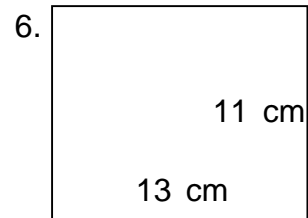
$P = 34 \text{ cm}$   $A = 72 \text{ cm}^2$

---



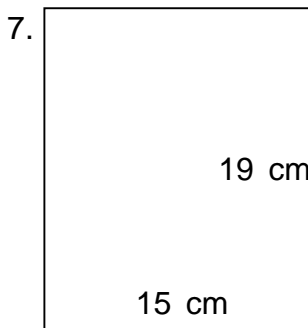
$P = 86 \text{ cm}$   $A = 462 \text{ cm}^2$

---



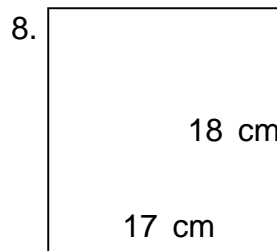
$P = 48 \text{ cm}$   $A = 143 \text{ cm}^2$

---



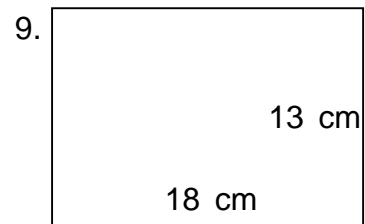
$P = 68 \text{ cm}$   $A = 285 \text{ cm}^2$

---



$P = 70 \text{ cm}$   $A = 306 \text{ cm}^2$

---



$P = 62 \text{ cm}$   $A = 234 \text{ cm}^2$

---