

Name: \_\_\_\_\_

Date: \_\_\_\_\_

## Finding Perimeter: Square, Rectangle, Triangle



Triangle Perimeter =  $side^1 + side^2 + side^3$



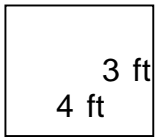
Square Perimeter =  $side \cdot 4$

Or.....Perimeter =  $side^1 + side^2 + side^3 + side^4$

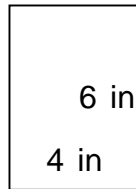


Rectangle Perimeter =  $2(\text{length}) + 2(\text{width})$

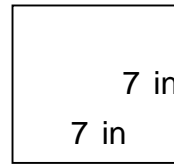
Perimeter =  $side^1 + side^2 + side^3 + side^4$



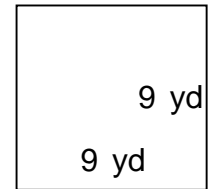
\_\_\_\_\_



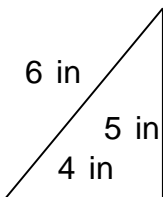
\_\_\_\_\_



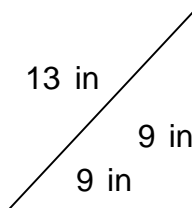
\_\_\_\_\_



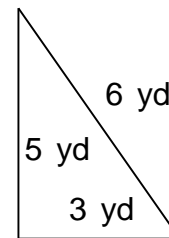
\_\_\_\_\_



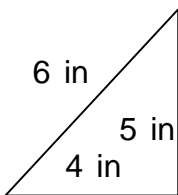
\_\_\_\_\_



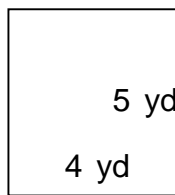
\_\_\_\_\_



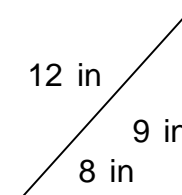
\_\_\_\_\_



\_\_\_\_\_



\_\_\_\_\_



\_\_\_\_\_

## Finding Perimeter: Square, Rectangle, Triangle



Triangle Perimeter =  $side^1 + side^2 + side^3$



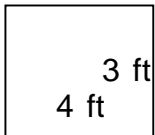
Square Perimeter =  $side \cdot 4$

Or.....Perimeter =  $side^1 + side^2 + side^3 + side^4$

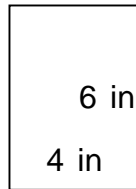


Rectangle Perimeter =  $2(\text{length}) + 2(\text{width})$

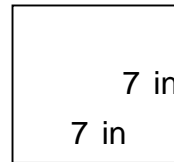
Perimeter =  $side^1 + side^2 + side^3 + side^4$



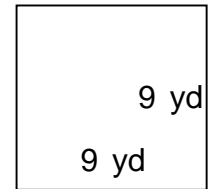
$P = 14 \text{ ft}$



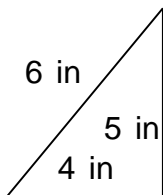
$P = 20 \text{ in}$



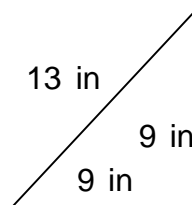
$P = 28 \text{ in}$



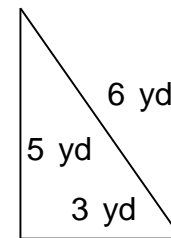
$P = 36 \text{ yd}$



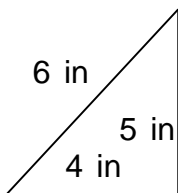
$P = 15 \text{ in}$



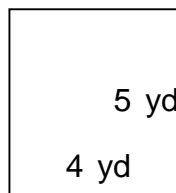
$P = 31 \text{ in}$



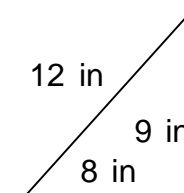
$P = 14 \text{ yd}$



$P = 15 \text{ in}$



$P = 18 \text{ yd}$



$P = 29 \text{ in}$