

Name: _____

Date: _____

Finding Perimeter: Square, Rectangle, Triangle



Triangle Perimeter = $side^1 + side^2 + side^3$



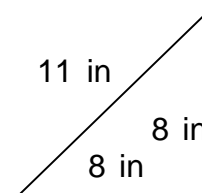
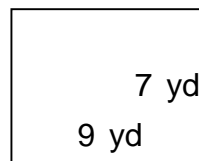
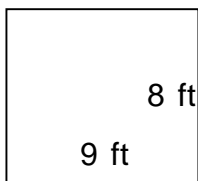
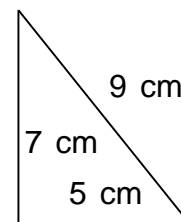
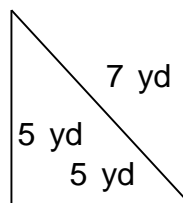
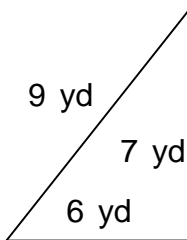

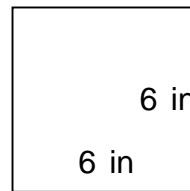
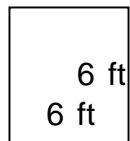
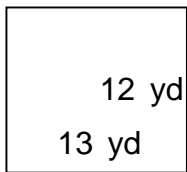
Square Perimeter = $side \cdot 4$

Or.....Perimeter = $side^1 + side^2 + side^3 + side^4$



Rectangle Perimeter = $2(\text{length}) + 2(\text{width})$

Perimeter = $side^1 + side^2 + side^3 + side^4$



Finding Perimeter: Square, Rectangle, Triangle



Triangle Perimeter = $side^1 + side^2 + side^3$



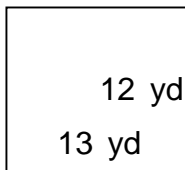
Square Perimeter = $side \cdot 4$

Or.....Perimeter = $side^1 + side^2 + side^3 + side^4$

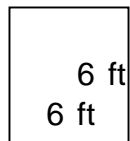


Rectangle Perimeter = $2(\text{length}) + 2(\text{width})$

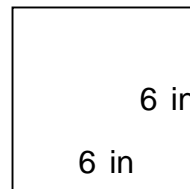
Perimeter = $side^1 + side^2 + side^3 + side^4$




$P = 50 \text{ yd}$



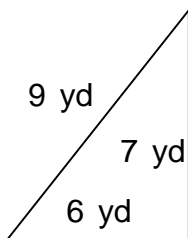
$P = 24 \text{ ft}$



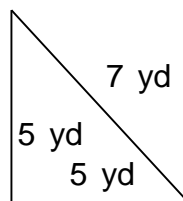
$P = 24 \text{ in}$



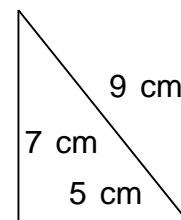
$P = 36 \text{ in}$



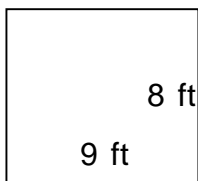
$P = 22 \text{ yd}$



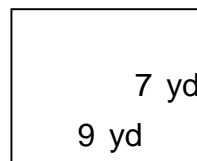
$P = 17 \text{ yd}$



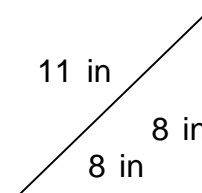
$P = 21 \text{ cm}$



$P = 34 \text{ ft}$



$P = 32 \text{ yd}$



$P = 27 \text{ in}$