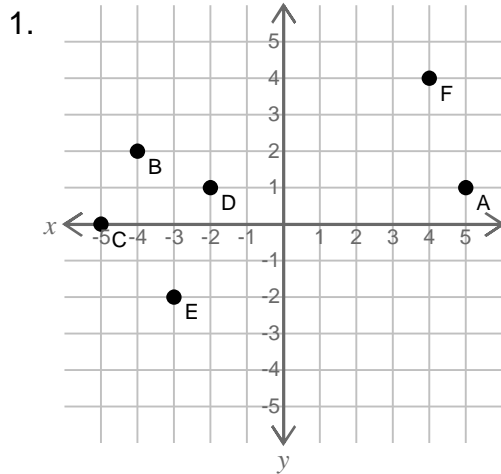


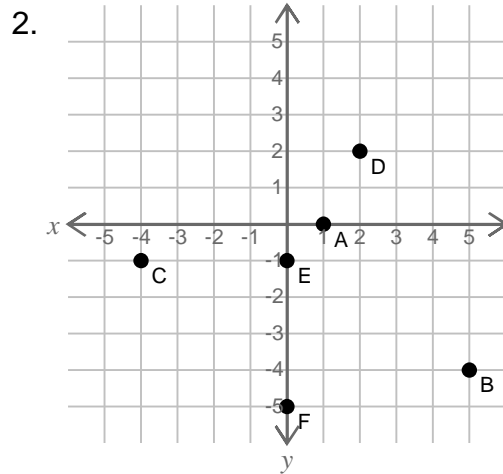
Identify the ordered pairs (points) on the coordinate grid.



A = _____ B = _____

C = _____ D = _____

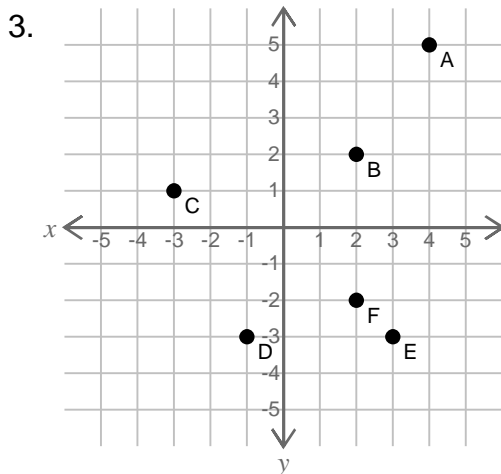
E = _____ F = _____



A = _____ B = _____

C = _____ D = _____

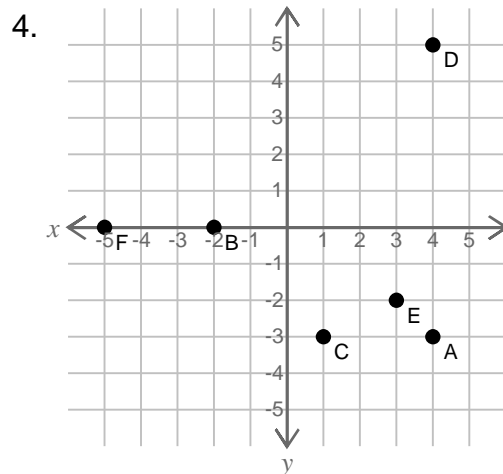
E = _____ F = _____



A = _____ B = _____

C = _____ D = _____

E = _____ F = _____

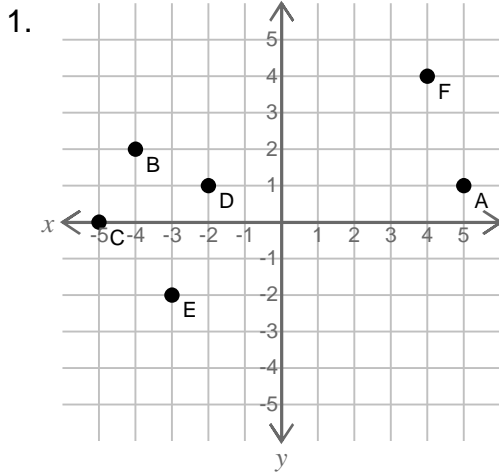


A = _____ B = _____

C = _____ D = _____

E = _____ F = _____

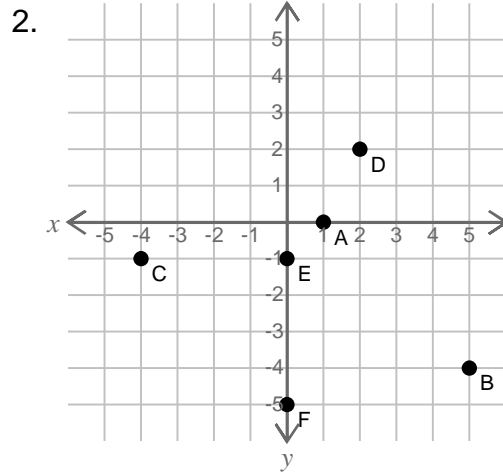
Identify the ordered pairs (points) on the coordinate grid.



A = (5, 1) B = (-4, 2)

C = (-5, 0) D = (-2, 1)

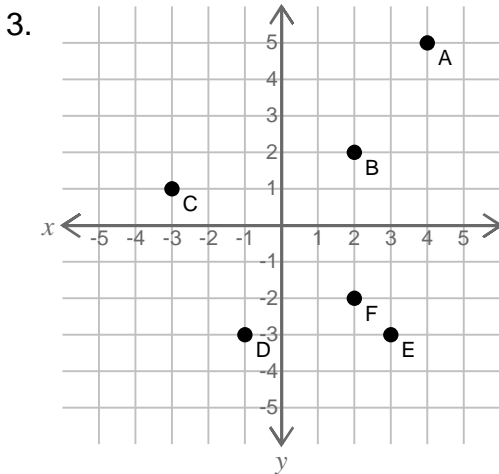
E = (-3, -2) F = (4, 4)



A = (1, 0) B = (5, -4)

C = (-4, -1) D = (2, 2)

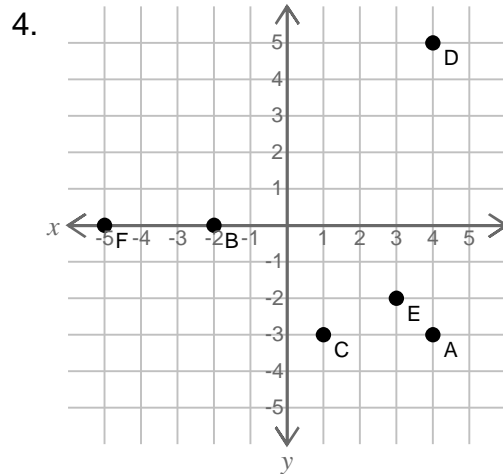
E = (0, -1) F = (0, -5)



A = (4, 5) B = (2, 2)

C = (-3, 1) D = (-1, -3)

E = (3, -3) F = (2, -2)



A = (4, -3) B = (-2, 0)

C = (1, -3) D = (4, 5)

E = (3, -2) F = (-5, 0)