

Name: \_\_\_\_\_

Date: \_\_\_\_\_

## Finding Perimeter: Square, Rectangle, Triangle



Triangle Perimeter =  $side^1 + side^2 + side^3$



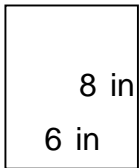
Square Perimeter =  $side \cdot 4$

Or.....Perimeter =  $side^1 + side^2 + side^3 + side^4$




Rectangle Perimeter =  $2(\text{length}) + 2(\text{width})$

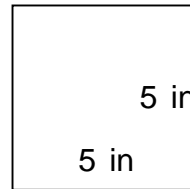
Perimeter =  $side^1 + side^2 + side^3 + side^4$



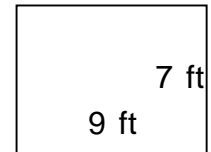
\_\_\_\_\_



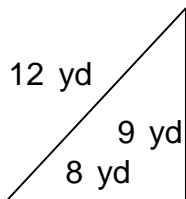
\_\_\_\_\_



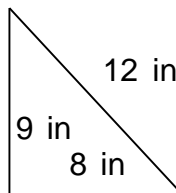
\_\_\_\_\_



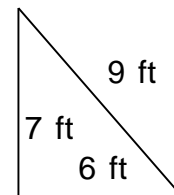
\_\_\_\_\_



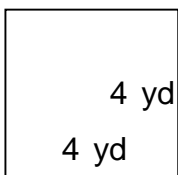
\_\_\_\_\_



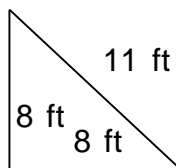
\_\_\_\_\_



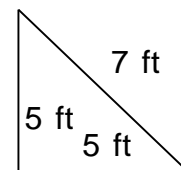
\_\_\_\_\_



\_\_\_\_\_



\_\_\_\_\_



\_\_\_\_\_

## Finding Perimeter: Square, Rectangle, Triangle



$$\text{Triangle Perimeter} = \textit{side}^1 + \textit{side}^2 + \textit{side}^3$$



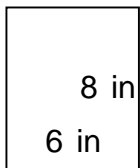
$$\text{Square Perimeter} = \textit{side} \cdot 4$$

$$\text{Or.....Perimeter} = \textit{side}^1 + \textit{side}^2 + \textit{side}^3 + \textit{side}^4$$

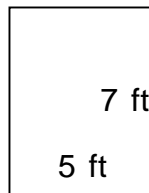


$$\text{Rectangle Perimeter} = 2(\textit{length}) + 2(\textit{width})$$

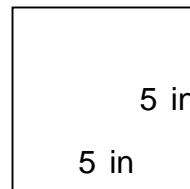
$$\text{Perimeter} = \textit{side}^1 + \textit{side}^2 + \textit{side}^3 + \textit{side}^4$$



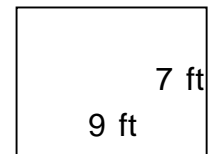
$$P = 28 \text{ in}$$



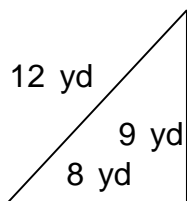
$$P = 24 \text{ ft}$$



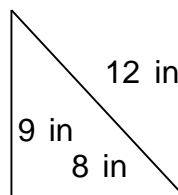
$$P = 20 \text{ in}$$



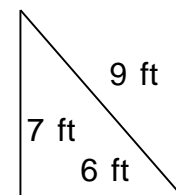
$$P = 32 \text{ ft}$$



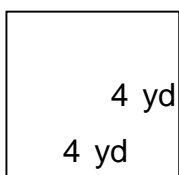
$$P = 29 \text{ yd}$$



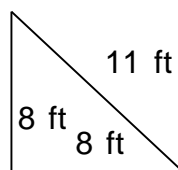
$$P = 29 \text{ in}$$



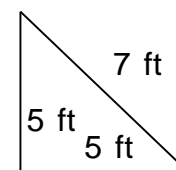
$$P = 22 \text{ ft}$$



$$P = 16 \text{ yd}$$



$$P = 27 \text{ ft}$$



$$P = 17 \text{ ft}$$