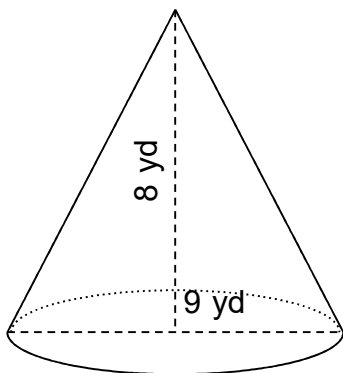


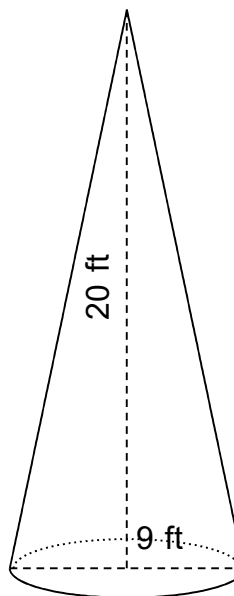
Find the volume of the cones.

1.



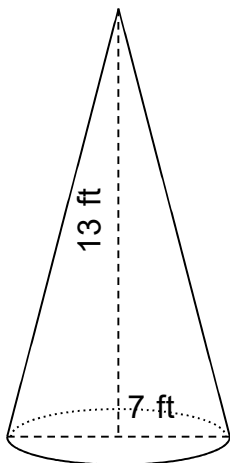
$V = 170 \text{ yd}^3$

2.



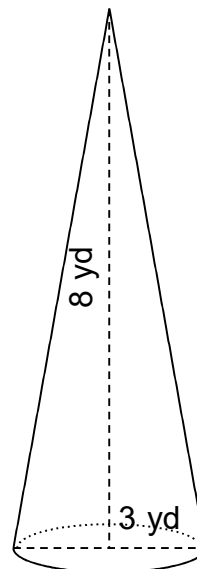
$V = 424 \text{ ft}^3$

3.



$V = 167 \text{ ft}^3$

4.



$V = 19 \text{ yd}^3$
