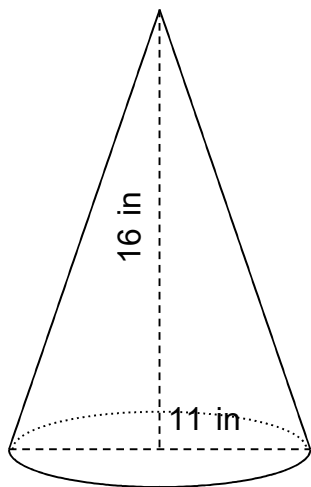


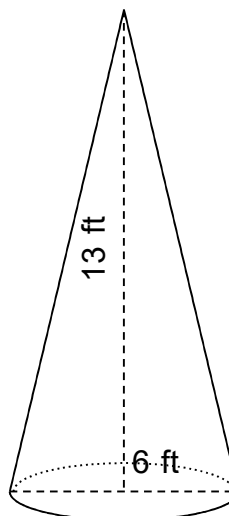
Find the volume of the cones.

1.



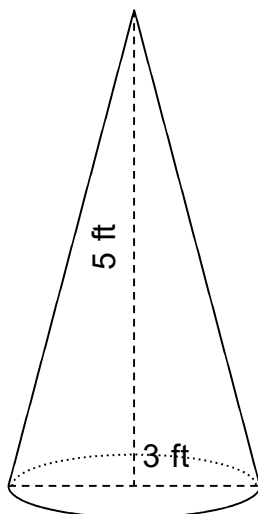
$V = 507 \text{ in}^3$

2.



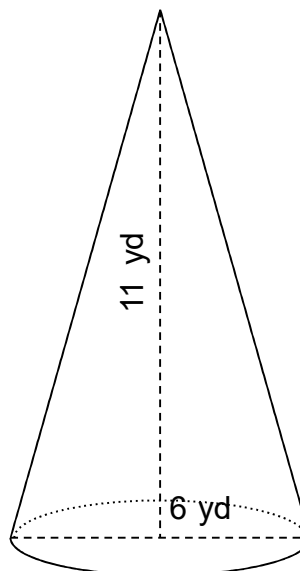
$V = 123 \text{ ft}^3$

3.



$V = 12 \text{ ft}^3$

4.



$V = 104 \text{ yd}^3$
